

1. twelve + four = \_\_\_\_\_

4.  $9 + 7 = 7 + \square$

2. 
$$\begin{array}{r} 14 \\ - 5 \\ \hline \end{array}$$



5. Jim saw 8 sea lions yesterday and 7 today. How many sea lions did Jim see?

\_\_\_\_\_ sea lions

= \_\_\_\_\_¢

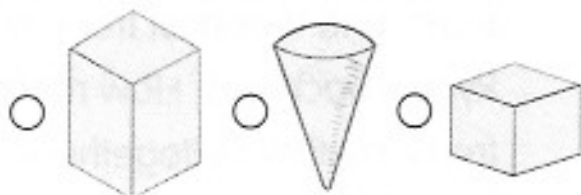
1.  $12 - 12 = \underline{\hspace{2cm}}$

4. Mark the odd numbers.

1 2 3 4 5 6 7 8 9

2. 
$$\begin{array}{r} 13 \\ - 7 \\ \hline \end{array}$$

3. Mark the cone.



5. There were 15 pigeons on the roof. If 8 flew away, how many were left?

\_\_\_\_\_ pigeons

1.  $17 - 0 = \underline{\hspace{2cm}}$

4.  $108 \underline{\hspace{1cm}} \underline{\hspace{1cm}}$

$\underline{\hspace{1cm}} 112$

2. 
$$\begin{array}{r} 12 \\ +14 \\ \hline \end{array}$$

3. Draw a line to make two sides that are the same.



5. How far will Alana travel if she walks six miles today and nine miles tomorrow?

 $\underline{\hspace{2cm}}$  miles

1.  $7 + 6 + 2 = \underline{\hspace{2cm}}$

4. Circle the object that is the same size and shape.



2. 
$$\begin{array}{r} 28 \\ -11 \\ \hline \end{array}$$



3. About how many pennies will this jar hold?






a. 500    b. 25    c. 150

5. There are 4 apple trees, 7 pear trees, and 4 apricot trees in Ryan's backyard. How many fruit trees are there altogether?

 $\underline{\hspace{2cm}}$  trees

## Elephants

	1 	2 	5 
trunk	1		
ears	2		
feet	4		
tail	1		

## Daily Progress Record 13

How many did you get correct each day? Color the squares.

5					
4					
3					
2					
1					
	Monday	Tuesday	Wednesday	Thursday	Friday

**Correct the sentences.**

1. i cant go to anns party

\_\_\_\_\_

2. arthur and me dont like snakes

\_\_\_\_\_

**Which word is spelled correctly?**

3. house      howse      hoose

**Which word means more than one goose?**

4. geoses      goose      geese

**Find the missing word.**

5. What are \_\_\_\_\_ going to do in the school play?  
     them   there   they

**Correct the sentences.**

1. dr garcia lives in that green house

\_\_\_\_\_

2. tammy dranked her milk and eat a apple

\_\_\_\_\_

**Which words have the sound of /c/ in "cent"?**

3. city      candy      cereal      center

**Number the words in alphabetical order.**

4.  ham     hug     his

**What will happen next?**

5. Jay fell down and cut his leg.  
 a. He will get up and play some more.  
 b. He will rub dirt in the cut.  
 c. He will get someone to put a bandage on the cut.

**Wednesday****Correct the sentences.**

1. does dr clark work in denver

\_\_\_\_\_

2. pedro is on the same team as carla tina and lee

\_\_\_\_\_

**Which greeting is correct—a., b., or c.?**

3. a. Dear, Grandma

b. Dear Grandma

c. Dear Grandma,

**What word is missing?**

4. fish : scales :: bird : \_\_\_\_\_

**Find the words that are opposites.**

5. clean

white

soft

dirty

**Thursday****Correct the sentences.**

1. what did them do for christmas

\_\_\_\_\_

2. are you going to a halloween party

\_\_\_\_\_

**What abbreviation is used for a married woman?**

3. Mr.

Ms.

Mrs.

**Is this a statement or a question?**

4. Can you tell me what time it is? \_\_\_\_\_

**Find the missing word.**5. Is a turtle \_\_\_\_\_ than a snail?  
slow slower slowest



## Is this word spelled correctly? Yes or No

1. Can you com to my house to play?

a

b

c

a. \_\_\_\_\_ b. \_\_\_\_\_ c. \_\_\_\_\_

2. He aks me two his party.

a

b

c

a. \_\_\_\_\_ b. \_\_\_\_\_ c. \_\_\_\_\_

3. Will Mark give me a piece uf dat pizza?

a

b

c

a. \_\_\_\_\_ b. \_\_\_\_\_ c. \_\_\_\_\_

## Daily Progress Record



How many did you get correct each day? Color the squares.

5					
4					
3					
2					
1					
	Monday	Tuesday	Wednesday	Thursday	Friday